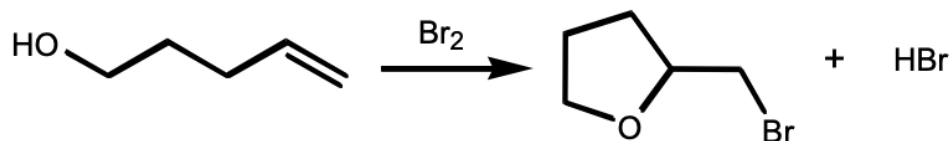


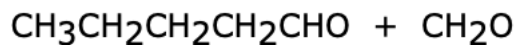
Chem 236 – Homework Assignment #3

Due September 29, 2023 (Before Lecture Begins)

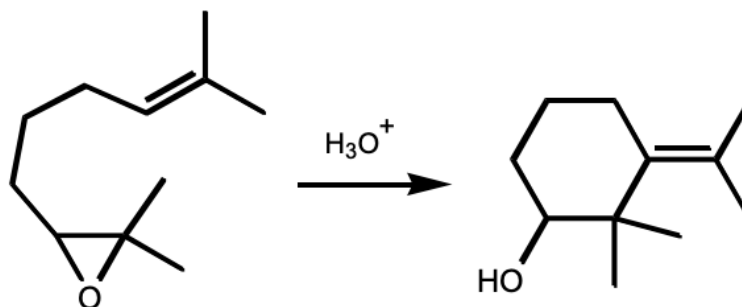
Provide a detailed, step-by-step mechanism for the reaction shown below.



What alkene would yield the following products upon ozonolysis?



Provide a detailed, step-by-step mechanism for the reaction shown below.



Predict the product for the following reactions.

