

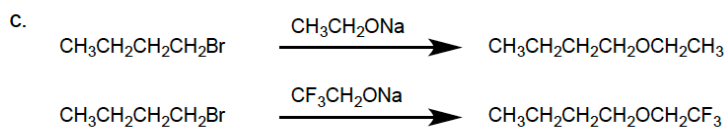
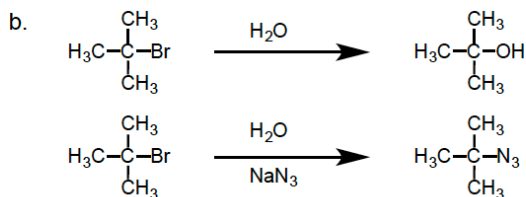
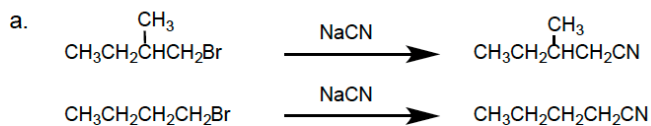
Chem 236 – Homework Assignment #5

Due October 30, 2023 (Before Lecture Begins)

Explain the following reactions. Why does one under nearly exclusive E2 and the other clean SN2?



For the following pairs of reactions, circle the one which is faster **and** briefly explain why. Most of the credit will be based on your explanation.



Fill in the reagents to accomplish the following transformations.

